

Name: _____ ()

Class: _____

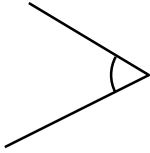
Acute angles and obtuse angles

Fill in the blanks.

1. An angle smaller than a right angle is called a/an _____ angle.
2. An angle larger than a right angle but smaller than two right angles is called a/an _____ angle.

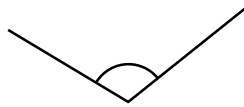
Write the name of the angles.

3.



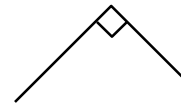
_____ angle

4.



_____ angle

5.



_____ angle

Draw angles according to instructions.



6. Draw a line on the above picture to make 2 obtuse angles and 2 acute angles.
7. Colour the obtuse angles in blue and the acute angles in green.