

Name: \_\_\_\_\_ ( )

Class: \_\_\_\_\_

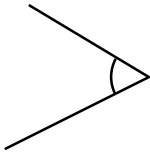
## Acute angles and obtuse angles

Fill in the blanks.

1. An angle smaller than a right angle is called a/an **acute** angle.
2. An angle larger than a right angle but smaller than two right angles is called a/an **obtuse** angle.

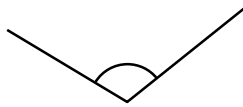
Write the name of the angles.

3.



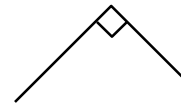
**acute** angle

4.



**obtuse** angle

5.



**right** angle

Draw angles according to instructions.



6. Draw a line on the above picture to make 2 obtuse angles and 2 acute angles.
7. Colour the obtuse angles in blue and the acute angles in green.